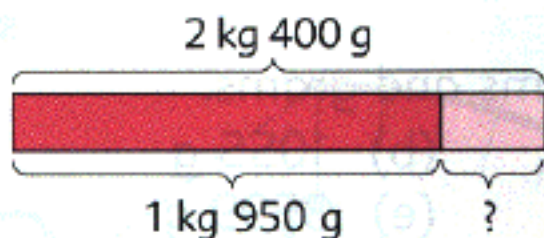
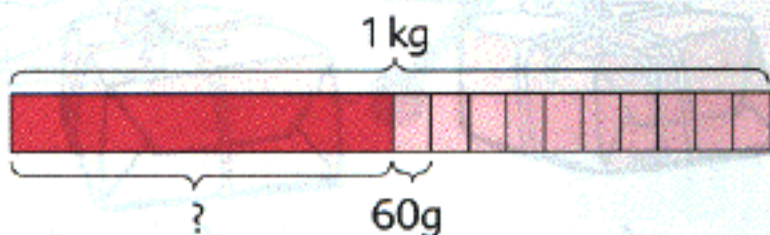


8. The total weight of a bag of flour and a bag of salt is 2 kg 400 g.
If the bag of flour weighs 1 kg 950 g, find the weight of the bag of salt.



9. The total weight of a football and 10 tennis balls is 1 kg.
If the weight of each tennis ball is 60 g, find the weight of the football.



$$\begin{aligned} \text{Weight of 10 tennis balls} &= 60 \times 10 \\ &= 600 \text{ g} \end{aligned}$$

$$\begin{aligned} \text{Weight of the football} &= 1 \text{ kg} - 600 \text{ g} \\ &= \blacksquare \text{ g} \end{aligned}$$

10. The total weight of a bottle of cooking oil and 2 bags of sugar is 5 kg 50 g.
If the weight of each bag of sugar is 2 kg, find the weight of the bottle of cooking oil.

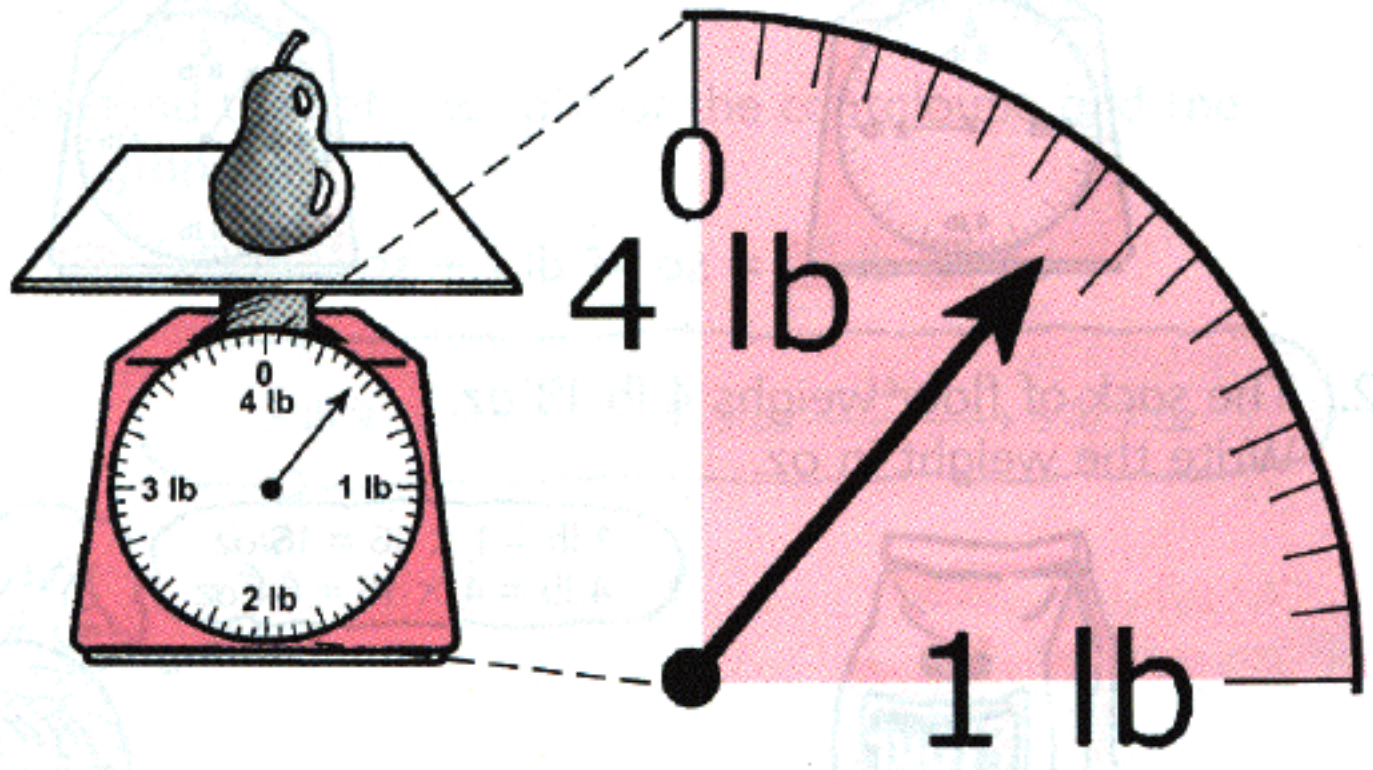
$$\text{Weight of 2 bags of sugar} = \blacksquare \text{ kg}$$

$$\text{Weight of the bottle of cooking oil} = \blacksquare \text{ kg } \blacksquare \text{ g}$$

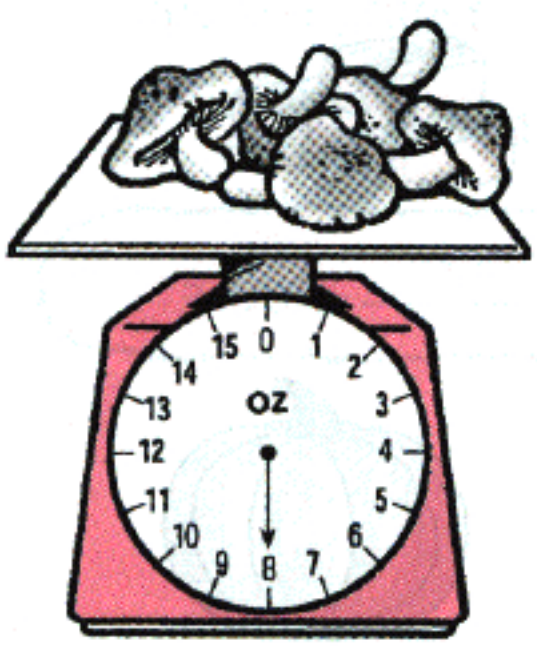
3 Pounds and Ounces

The **pound (lb)** and **ounce (oz)** are units of weight.

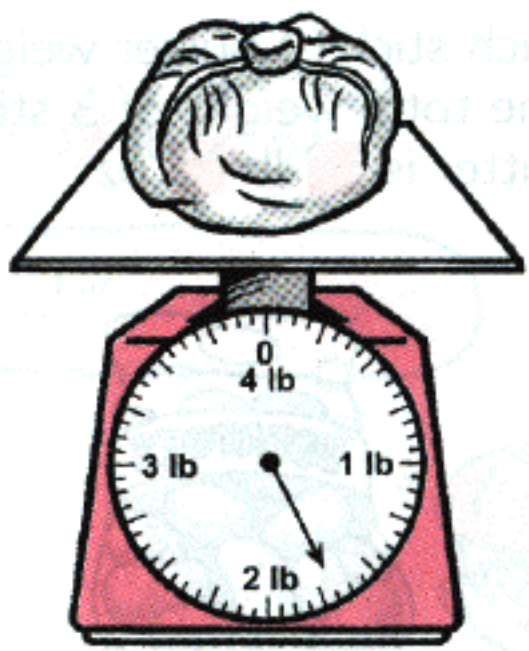
$1 \text{ lb} = 16 \text{ oz}$



The pear weighs 7 oz.

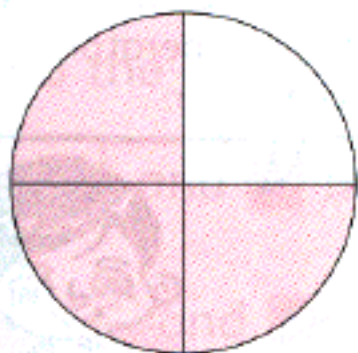


The mushrooms weigh ■ oz.



The cabbage weighs ■ lb ■ oz.

4.



3 ← **numerator**
4 ← **denominator**

In the fraction $\frac{3}{4}$, 3 is the numerator and 4 is the denominator.

Name the numerator and denominator of each of these fractions.

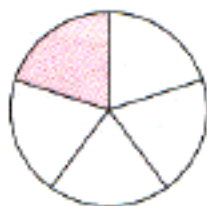
(a) $\frac{2}{5}$

(b) $\frac{4}{10}$

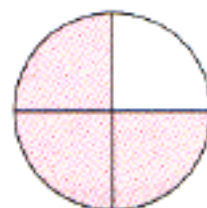
(c) $\frac{6}{7}$

(d) $\frac{6}{9}$

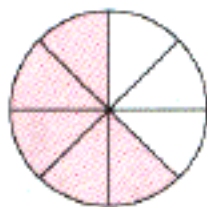
5. Which is greater, $\frac{1}{5}$ or $\frac{1}{3}$?



6. Which is greater, $\frac{3}{4}$ or $\frac{3}{5}$?



7. Which is greater, $\frac{3}{8}$ or $\frac{5}{8}$?




6. The table shows the time taken by 3 children to paint a picture.

Name	Time taken
Amy	1 h 15 min
Jane	2 h 5 min
Siti	1 h 20 min

- (a) Who took the longest time?
 (b) Who took the shortest time?

7. Mary took 1 h 35 min to complete a jigsaw puzzle.
 Write the time taken in minutes.

1 h 35 min = min

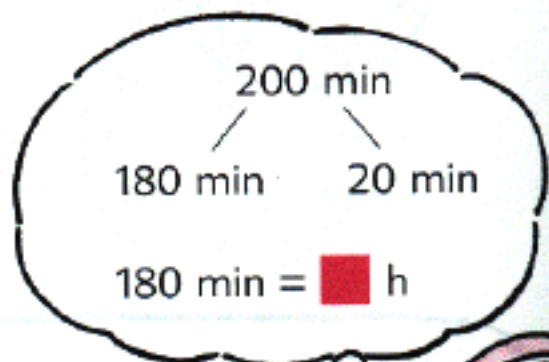


8. Write in minutes.

- (a) 2 h (b) 2 h 10 min (c) 2 h 45 min
 (d) 3 h (e) 3 h 5 min (f) 3 h 15 min

9. Mrs. Lee sewed 4 sets of curtains.
 She took 50 minutes to sew each set of curtains.
 Find the total time taken in hours and minutes.

$50 \text{ min} \times 4 = 200 \text{ min}$
 $200 \text{ min} = \text{■ h } \text{■ min}$



10. Write in hours and minutes.

- (a) 70 min (b) 85 min (c) 100 min
 (d) 125 min (e) 160 min (f) 210 min