


EXERCISE 16


1. Add.

$\begin{array}{r} 913 \\ + 68 \\ \hline \end{array}$	$\begin{array}{r} 234 \\ + 139 \\ \hline \end{array}$	$\begin{array}{r} 402 \\ + 69 \\ \hline \end{array}$
$\begin{array}{r} 527 \\ + 266 \\ \hline \end{array}$	$\begin{array}{r} 703 \\ + 169 \\ \hline \end{array}$	$\begin{array}{r} 328 \\ + 48 \\ \hline \end{array}$
$\begin{array}{r} 605 \\ + 145 \\ \hline \end{array}$	$\begin{array}{r} 346 \\ + 329 \\ \hline \end{array}$	$\begin{array}{r} 836 \\ + 54 \\ \hline \end{array}$

Color the spaces which contain the answers.
You will help Mr. Lion find the way to the river.



3. Measure the length and width of this rectangle.



The length is about _____ cm.

The width is about _____ cm.

4. Use a string and a ruler to measure the lines.



Line A is about _____ cm long.



Line B is about _____ cm long.



Line C is about _____ cm long.

(d) Line _____ is the longest.

(e) Line _____ is the shortest.

EXERCISE 28

1. Fill in the blanks with in., ft or yd.

(a) The length of a television is about 2 _____.

(b) The length of a paper clip is about 1 _____.

(c) The length of a classroom chalkboard is about
3 _____.

(d) A pencil is about 7 _____ long.

(e) Emma is about 3 _____ tall.

2. A green rod is 2 yd long. A yellow rod is 2 m long.

Which rod is longer? _____

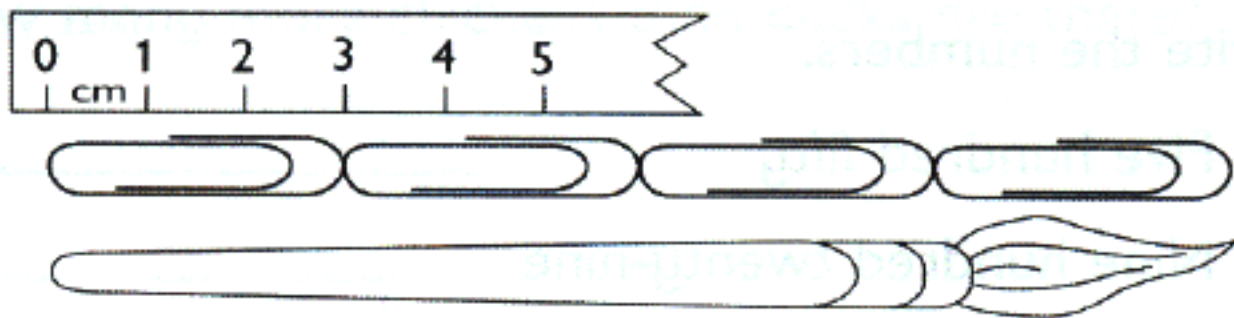
3.



(a) Draw a line 3 in. longer than AB.

(b) Draw a line 2 in. shorter than AB.

5. Fill in the blanks.

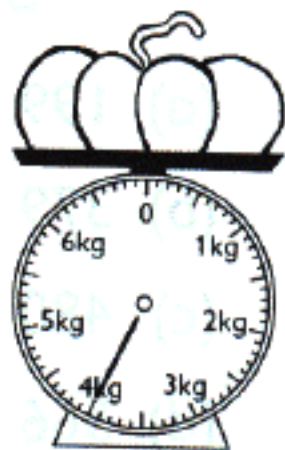


- (a) The length of each paper clip is _____ cm.
(b) The length of the brush is _____ cm.

6. Fill in the blanks.

- (a) The pumpkin weighs _____ kg.
(b) 1 kg of pumpkin costs \$3.

The pumpkin costs \$ _____.



7. Fill in the blanks with the correct units.

lb, oz, yd, ft, in.

- (a) Mr. Owens weighs about 150 _____.
(b) Justin's height is about 38 _____.
(c) After dinner, Lily and her brother ate about 9 _____ of grapes.
(d) The height of a door is about 2 _____.
(e) The length of this book is about 1 _____.