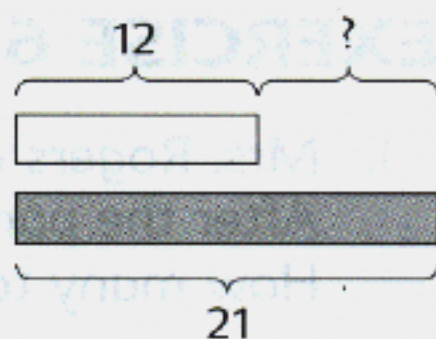
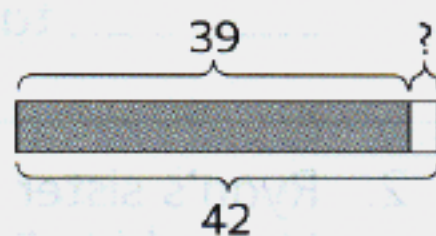


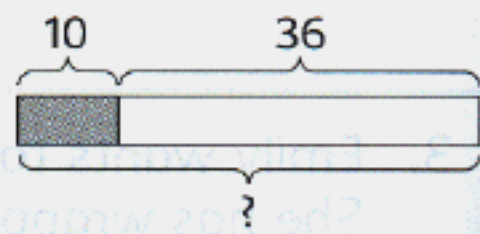
4. Rani is 12 years old.  
Her sister is 21 years old.  
Find the difference in age between them.



5. Mary weighed 39 kg last year.  
She now weighs 42 kg.  
How many kilograms has she gained?



6. After giving away 10 comic books,  
Tom had 36 comic books left.  
How many comic books did Tom  
have at first?

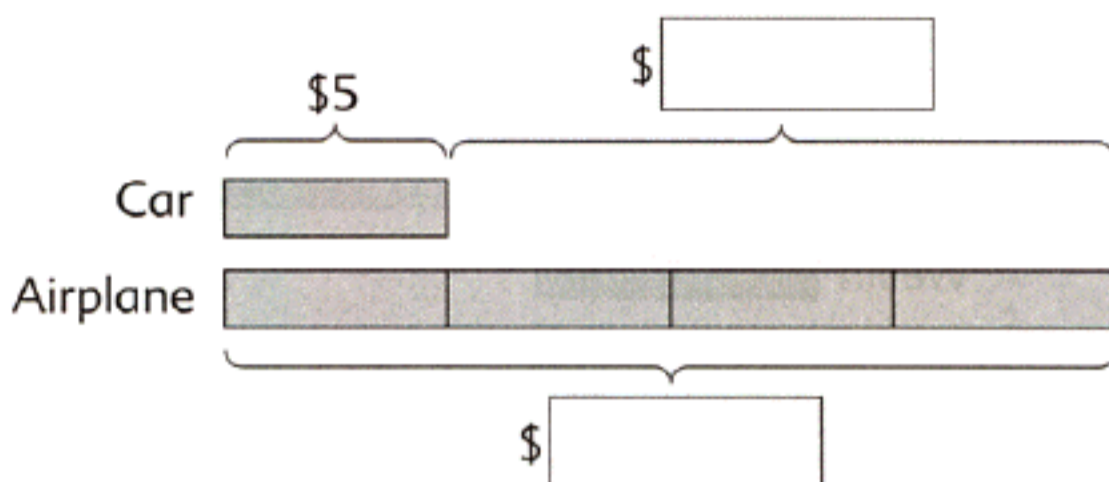


7. Find the difference between 96 and 54.



4. A toy car costs \$5.  
A toy airplane costs 4 times as much as the toy car.

(a) Write the missing numbers in the boxes.



(b) What is the cost of the toy airplane?


(c) How much more does the toy airplane cost than the toy car?



# EXERCISE 46

1. How much money is there in each purse?

(a)



(b)



(c)





## REVIEW 6

1. Fill in the blanks.

(a) 1 more than 4069 is \_\_\_\_\_.

(b) 10 more than 1390 is \_\_\_\_\_.

(c) \_\_\_\_\_ is 10 less than 6029.

(d) \_\_\_\_\_ is 100 less than 5000.

2. Write the missing numbers.

(a)  $100 + \underline{\hspace{2cm}} = 1000$

(b)  $402 + \underline{\hspace{2cm}} = 1000$

(c)  $4329 + \underline{\hspace{2cm}} = 5000$

3. Do these.

(a)  $1988 + 650 =$

(b)  $4010 - 1256 =$

(c)  $684 \times 9 =$

(d)  $440 \div 9 =$

4. (a) The difference between two numbers is 50.  
If the smaller number is 24, what is the other number?